


COLOR BY CODES CLASSIFYING QUADRILATERALS

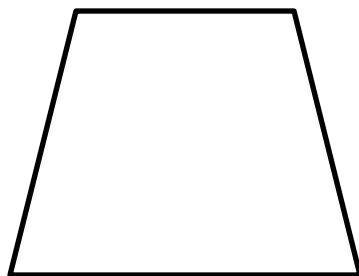


Answer the questions - find your answer on the Valentines Couple - color according to your answers.


1. Classify the quadrilateral given below. (RED)



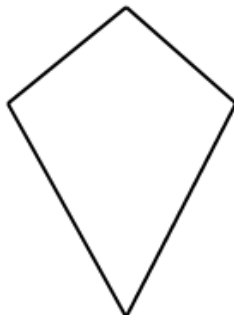
2. Classify the quadrilateral given below. (ORANGE)



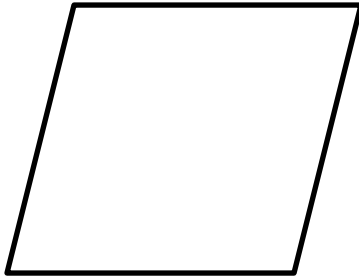
3. Classify the quadrilateral given below. (BROWN)



4. Classify the quadrilateral given below. (GREEN)



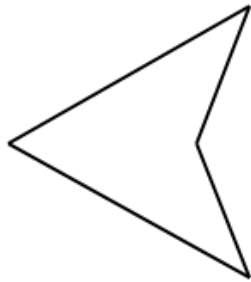
5. What is the name of the quadrilateral given below? (PINK)



6. What is the name of the quadrilateral given below? (YELLOW)



7. What is the name of the quadrilateral given below? (RED)



8. Which of the following shapes matches a rhombus? (LIGHT YELLOW)

- a. Hearts
- b. Diamond
- c. Spade
- d. Club

9. All the angles in a square measure: (LIGHT YELLOW)


- a. less than 90°
- b. greater than 90°
- c. equal to 90°
- d. None of these

10. A quadrilateral has ____ sides: (DARK GREY)

- a. 3
- b. 2
- c. 4
- d. 5

11. Each angle of a rectangle is equal to: (ORANGE)

- a. 90°
- b. 120°
- c. 45°
- d. 180°



Answers:

1. RECTANGLE
2. TRAPEZIUM
3. RHOMBUS
4. KITE
5. PARALLELOGRAM
6. SQUARE
7. CONCAVE
QUADRILATERAL
8. Diamond
9. Equal to 90°
- 10.4
11. 90°