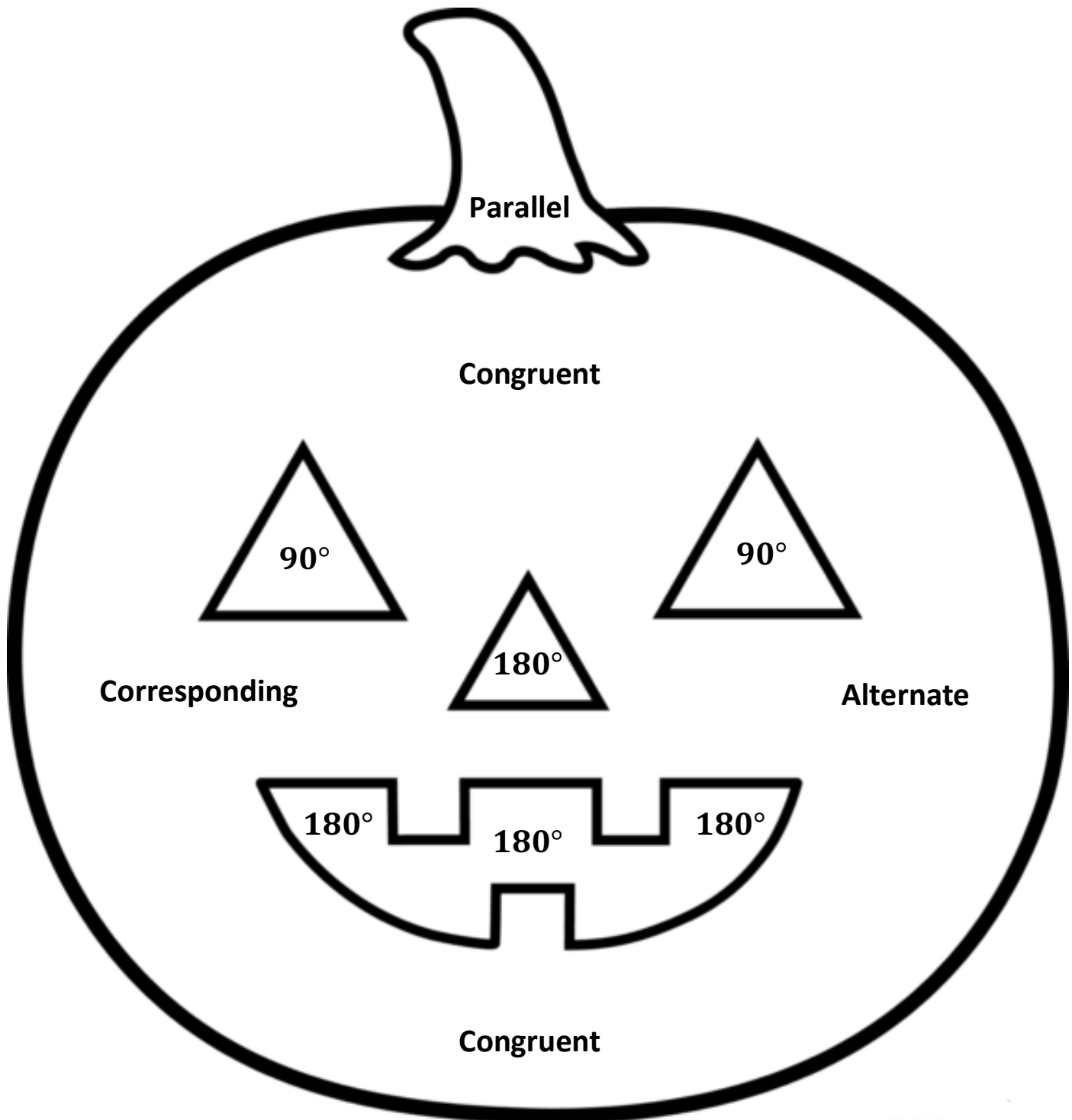


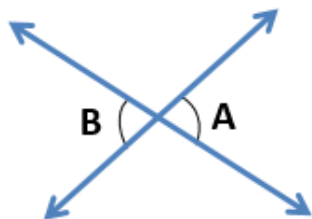
Name: _____ Period: _____ Date: _____

Color Match Activity IDENTIFY PAIRS OF LINES AND ANGLES

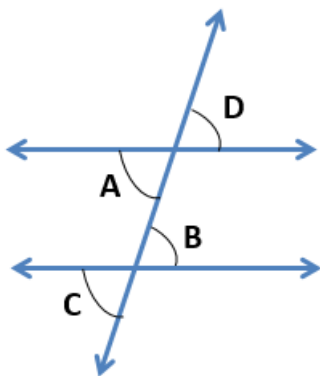


Directions: Answer the questions. Find your answer on the Halloween Jack-O-Lantern. Then color according to your answers.

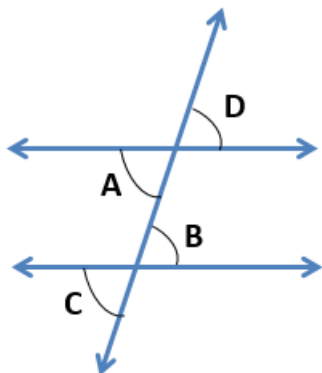
1. If two lines never intersect each other, the lines are _____. (GREEN)
2. Two lines are perpendicular if they meet each other at an angle of _____. (BLACK)
3. Two angles are said to be supplementary if their sum is _____. (BLACK)
4. In the figure given below $\angle A$ and $\angle B$ are _____. (ORANGE)



5. In the figure below, $\angle B$ and $\angle D$ are _____ Exterior Angles. (ORANGE)



6. In the figure below, $\angle A$ and $\angle C$ are _____ Angles. (ORANGE)





Answers:

1. Parallel
2. 90°
3. 180°
4. Congruent
5. Alternate
6. Corresponding