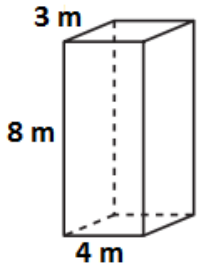


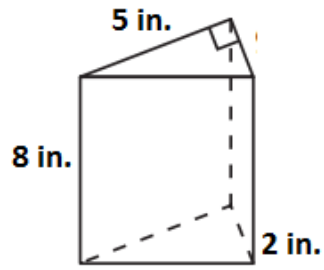
Volumes of Prisms and Cylinders Assignment

Find the volume of each prism shown below.

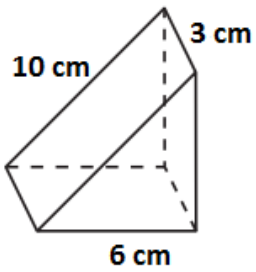
1.



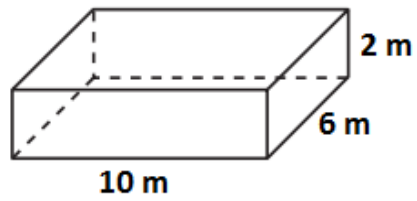
2.



3.



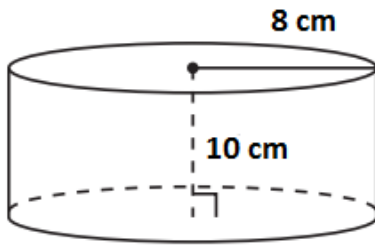
4.



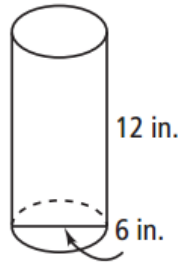
Volumes of Prisms and Cylinders Assignment

Find the volume of each cylinder given below.

1.

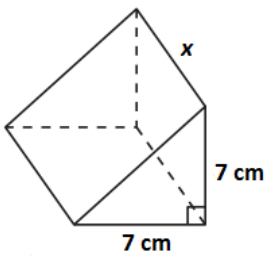


2.



Find the unknown variable x given the volume.

1. Volume = 600 cm^3



2. Volume = 440 m^3

