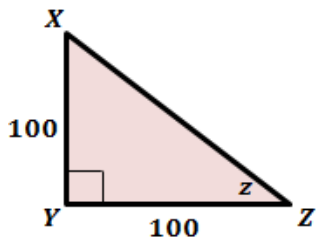


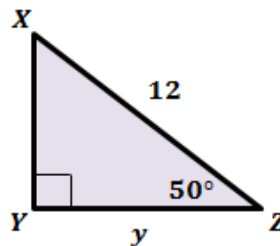
Trigonometry Bell Work

Find the unknown variable in each triangle. Round the answer to the nearest tenth.

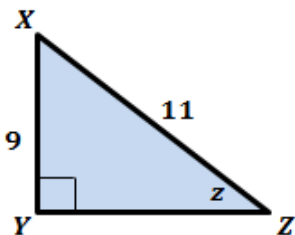
1.



2.



3.



4.

