

Name: _____

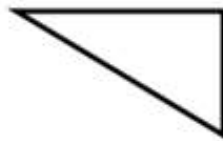
Date: _____

Classifying Triangles Worksheet

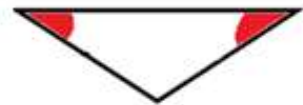
Classify each triangle as *SCALEDNE*, *ISOSCELES*, or *EQUILATERAL*.



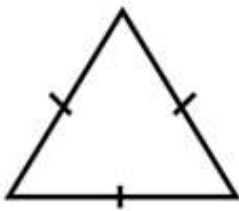
Answer: _____



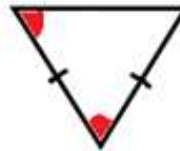
Answer: _____



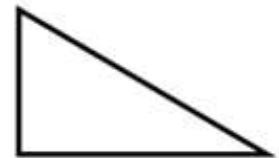
Answer: _____



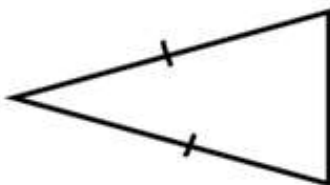
Answer: _____



Answer: _____




Answer: _____



Answer: _____



Answer: _____



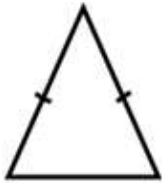
Answer: _____

Name: _____

Date: _____

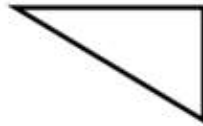
Classifying Triangles Worksheet

Classify each triangle as *SCALEDNE*, *ISOSCELES*, or *EQUILATERAL*.



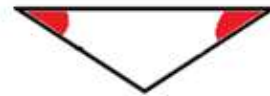
Isosceles

Answer: _____



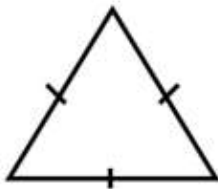
Scalene

Answer: _____



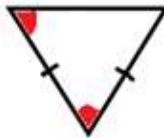
Isosceles

Answer: _____



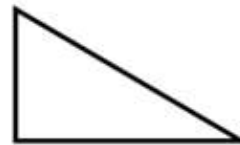
Equilateral

Answer: _____



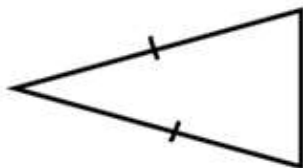
Equilateral

Answer: _____



Scalene

Answer: _____




Isosceles

Answer: _____



Isosceles

Answer: _____



Equilateral

Answer: _____