






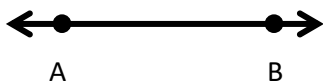
# Points Lines Planes Assignment

Match the columns in the table given below:

<b>Point</b>	
<b>Line</b>	
<b>Ray</b>	
<b>Line Segment</b>	
<b>Plane</b>	

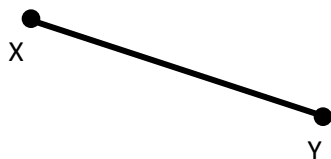
Write the correct name and label of each geometric shape.

1.



\_\_\_\_\_

2.



\_\_\_\_\_

# Points Lines Planes Assignment

3.



\_\_\_\_\_

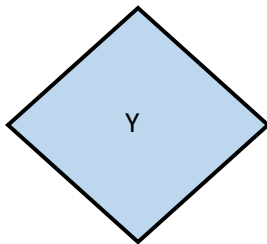
4.



\_\_\_\_\_

Write the correct name and label of this geometric shape.

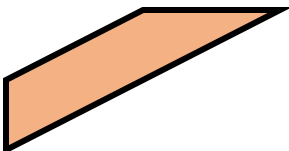
1.



\_\_\_\_\_

Write the number of dimensions of each shape given below.

1.



\_\_\_\_\_



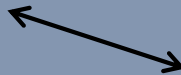


2.



\_\_\_\_\_

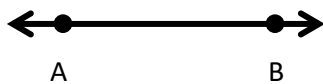
# Points Lines Planes Assignment

Match the columns in the table given below:

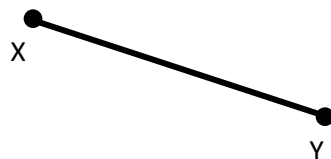
<b>Point</b>	
<b>Line</b>	
<b>Ray</b>	
<b>Line Segment</b>	
<b>Plane</b>	

Write the correct name and label of each geometric shape.

1.

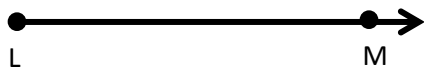


2.

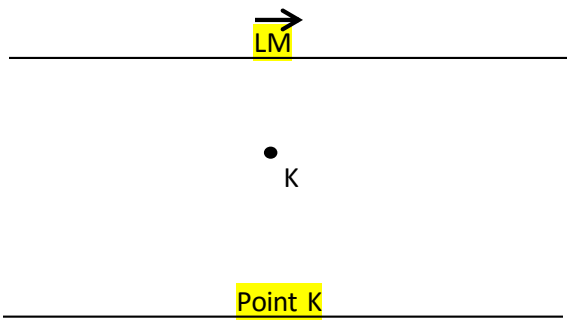


# Points Lines Planes Assignment

5.

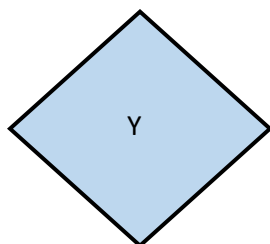


6.



Write the correct name and label of this geometric shape.

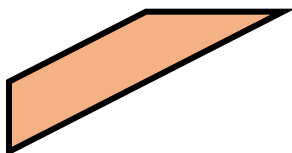
2.



Plane Y

Write the number of dimensions of each shape given below.

2.



2

2.



3